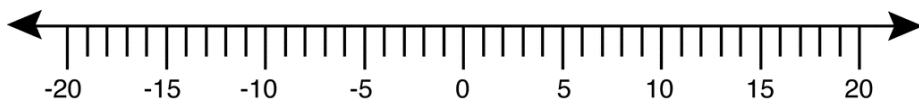


$$2 \times -7$$

Assignment #12  
Multiplying negative integers

Number Line:



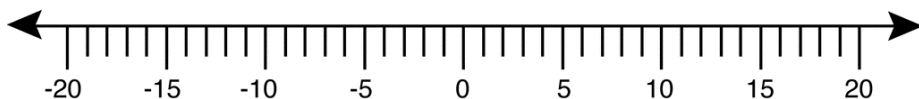
Counters:

Explanation:

Verbal representations:

$$3 \times -4$$

Number Line:



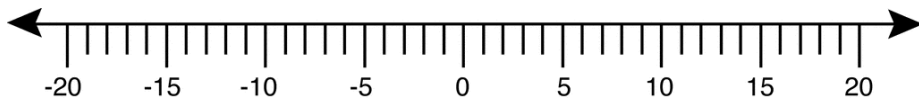
Counters:

Explanation:

Verbal representations:

$$-5 \times 4$$

Number Line:



Counters:

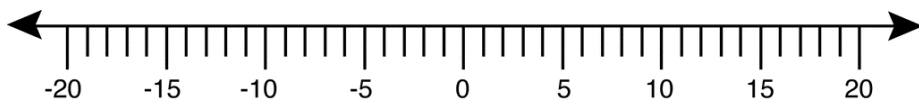
Explanation:

Verbal representations:

$$-6 \times 2$$

Assignment #12  
Multiplying negative integers

Number Line:



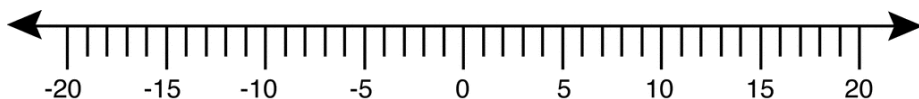
Counters:

Explanation:

Verbal representations:

$$-2 \times -4$$

Number Line:



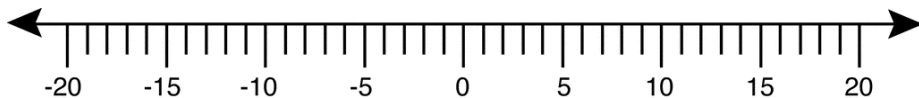
Counters:

Explanation:

Verbal representations:

$$-3 \times -5$$

Number Line:



Counters:

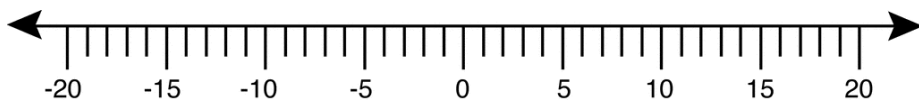
Explanation:

Verbal representations:

$$4 \times -1$$

Assignment #12  
Multiplying negative integers

Number Line:



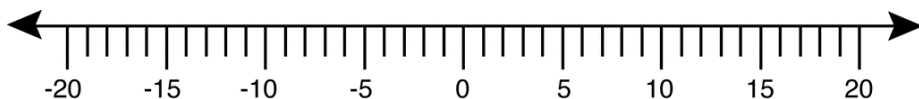
Counters:

Explanation:

Verbal representations:

$$4 \times -4$$

Number Line:



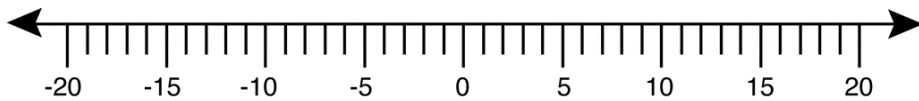
Counters:

Explanation:

Verbal representations:

$$-3 \times 2$$

Number Line:



Counters:

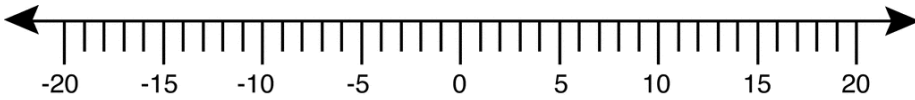
Explanation:

Verbal representations:

$$-8 \times 2$$

Assignment #12  
Multiplying negative integers

Number Line:



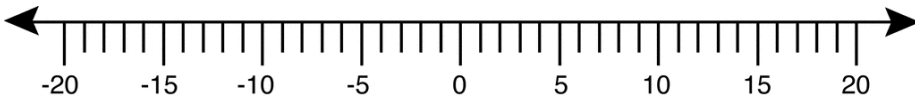
Counters:

Explanation:

Verbal representations:

$$-1 \times -4$$

Number Line:



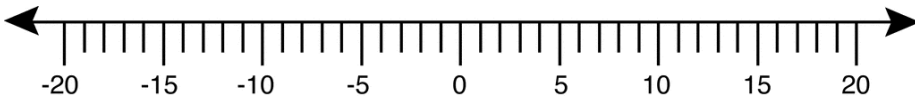
Counters:

Explanation:

Verbal representations:

$$-3 \times -5$$

Number Line:



Counters:

Explanation:

Verbal representations: